

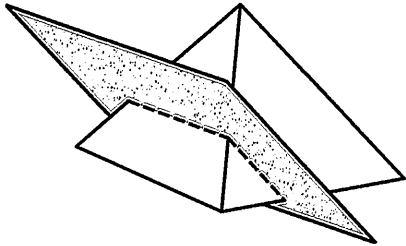
# Cross Section Worksheet Form A

Name \_\_\_\_\_


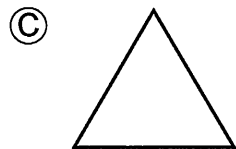
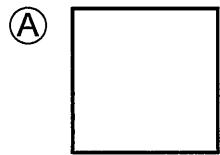
Date \_\_\_\_\_

Class/Grade \_\_\_\_\_

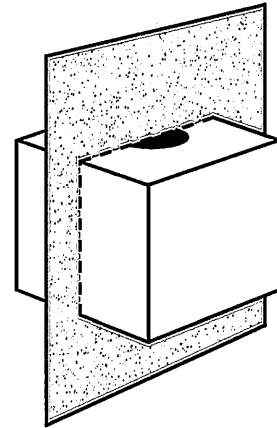
- 1 A square pyramid is cut along the shaded plane shown below.



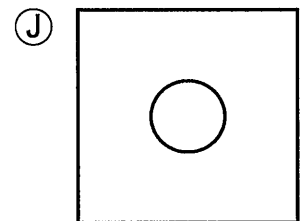
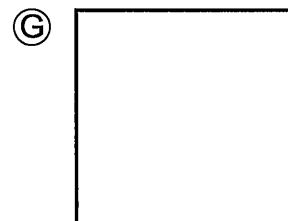
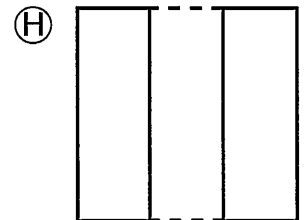
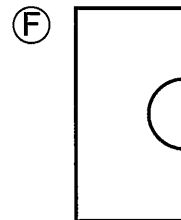
Which of the following is the cross-section of this solid?



- 2 A cube with a cylinder cut from its center is cut along the plane shown below.

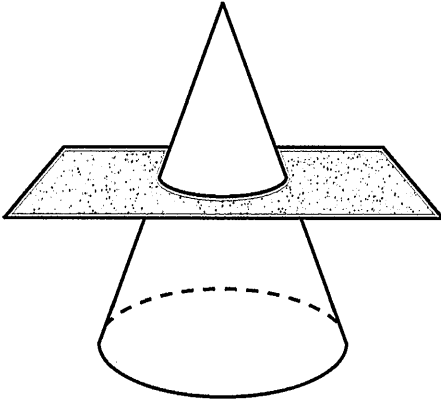


Which of the following is the cross-section of this solid?



### Cross Section Worksheet Form A

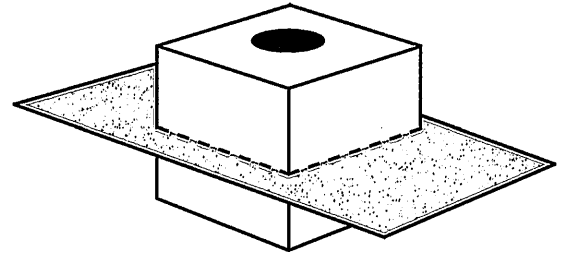
- 3 A cross-section is cut from the circular cone below.



What is the shape of the cross-section?

- (A) Square
- (B) Semicircle
- (C) Triangle
- (D) Circle

- 4 A cube with a cylinder cut from its center is cut along the plane shown below.

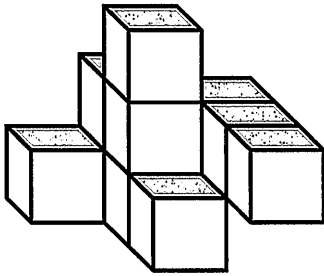


Which of the following is the cross-section of this solid?

- (F)
- (H)
- (G)
- (J)

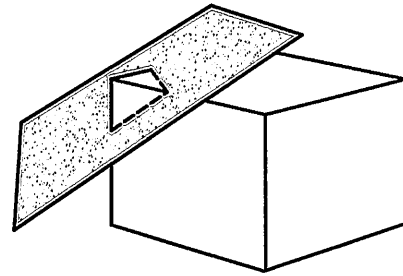
# Cross Section Worksheet Form A

- 5 Which drawing represents the top view of this solid?



- (A)
- (B)
- (C)
- (D)

- 6 A rectangular prism is cut along the shaded plane shown below.

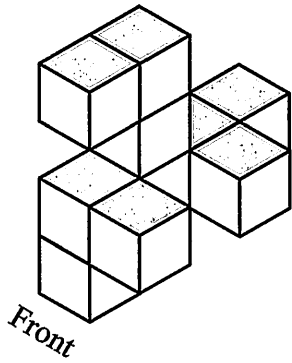


Which of the following is the cross-section of this solid?

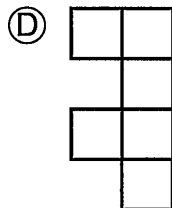
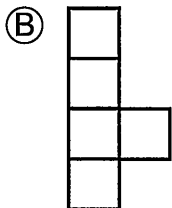


- (F)
- (G)
- (H)
- (J)

# Cross Section Worksheet Form A

- 7 The three-dimensional figure shown is composed of 10 identical cubes.

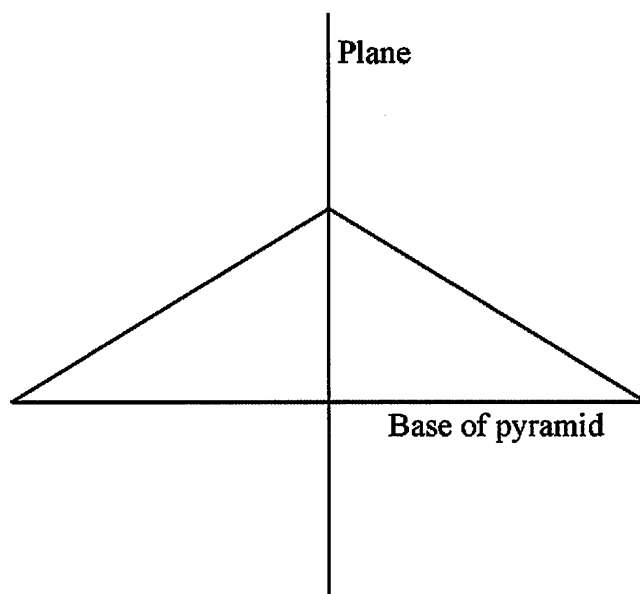


Which of the following could not represent a top, front, or side view of the figure?



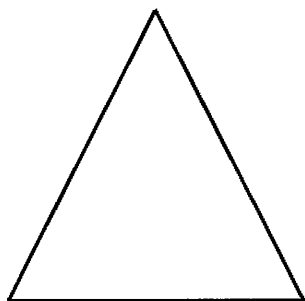
## Cross Section Worksheet Form A

- 8 A side view of the intersection of a plane and a square pyramid is modeled below.




Which of the following best represents the shape formed by the intersection?

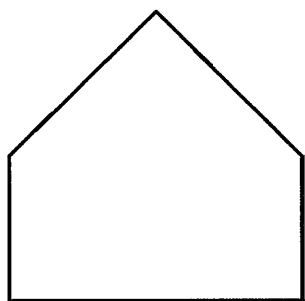
Ⓕ



Ⓗ



Ⓖ

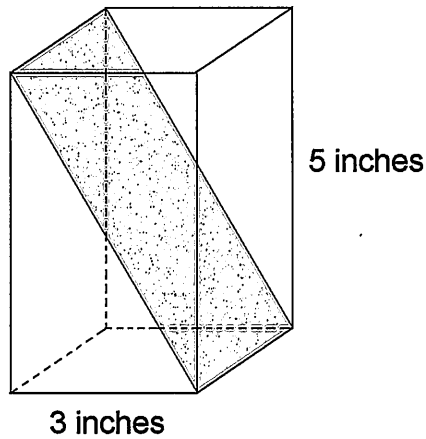


Ⓙ



## Cross Section Worksheet Form A

- 9 Andrew had a piece of foam in the shape of a rectangular prism as shown below. The base is a square with sides 3 inches long, and the piece is 5 inches tall. He cut the foam along the diagonal plane shown by the shaded area.

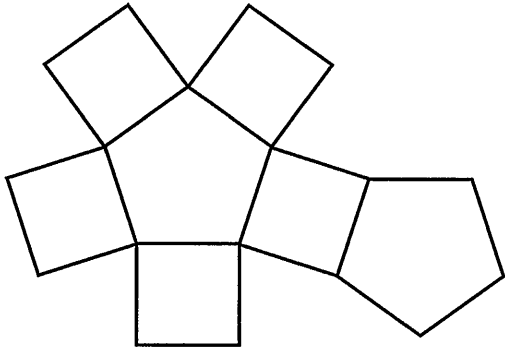


Which of the following is closest to the area of the shaded diagonal plane?

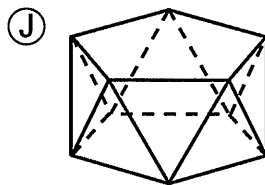
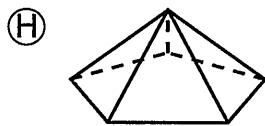
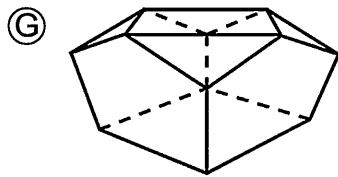
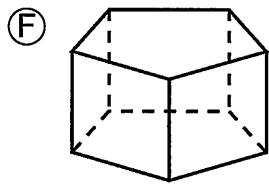
- (A) 19.3 square inches
- (B) 12 square inches
- (C) 15.8 square inches
- (D) 17.5 square inches

## Cross Section Worksheet Form A

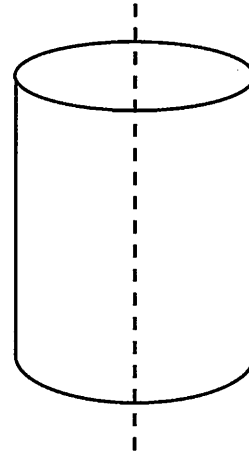
- 10** The net of a specific polyhedron is shown below.



Which polyhedron is represented by this net?



- 11** A cross-section is cut from the cylinder below.

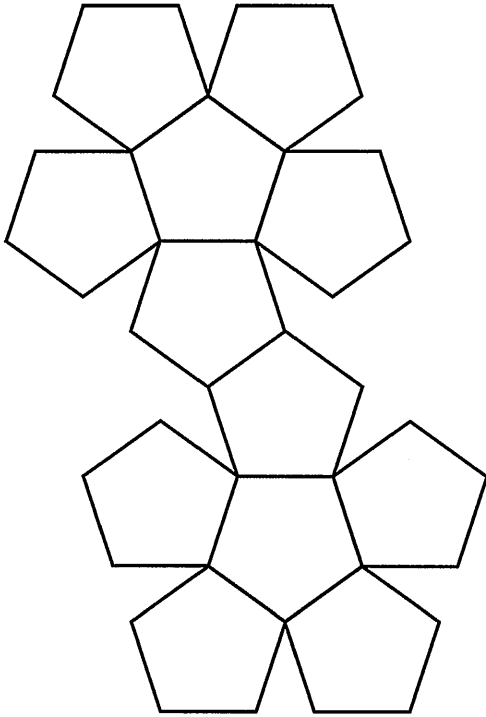


What is the shape of the cross-section?

- (A) Rectangle
- (B) Circle
- (C) Semicircle
- (D) Oval

# Cross Section Worksheet Form A

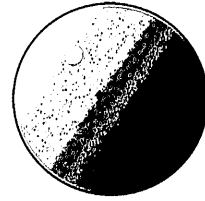
12 Below is the net of a regular dodecahedron.




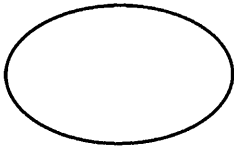


How many edges does a regular dodecahedron have?

- (F) 60
- (G) 24
- (H) 50
- (J) 30

13 Which of the following is a cross-section of a sphere?

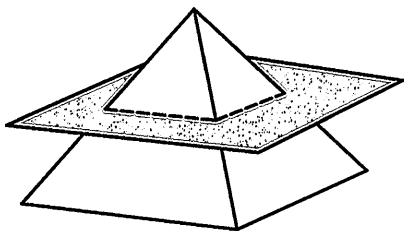


- (A) 
- (B) 
- (C) 
- (D) 

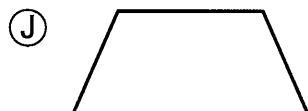


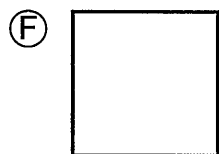


## Cross Section Worksheet Form A

- 14 A square pyramid is cut along the shaded plane shown below.

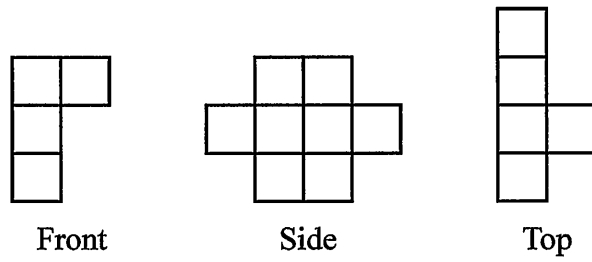


Which of the following is the cross-section of this solid?

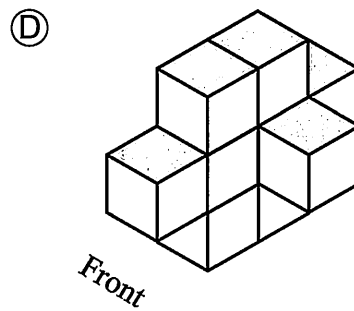
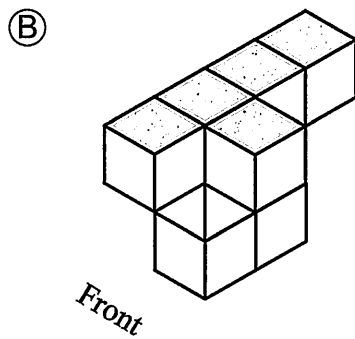
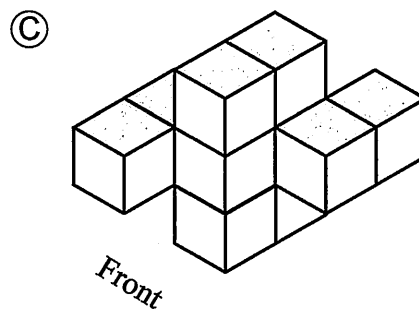
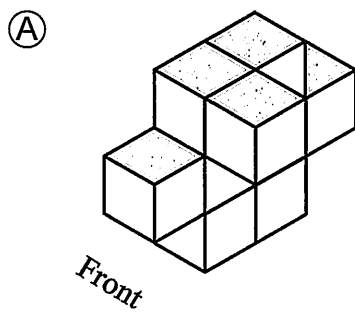


# Cross Section Worksheet Form A

- 15** The front, side, and top views of a three-dimensional figure composed of 9 identical cubes are shown below.

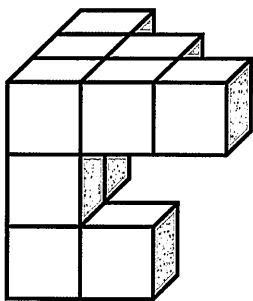


Which of the following could be the represented figure?



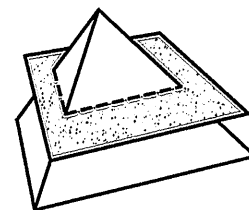
# Cross Section Worksheet Form A

- 16** Which drawing represents the side view of this solid?



- (F)
- (H)
- (G)
- (J)

- 17** A triangular pyramid is cut along the shaded plane shown below.

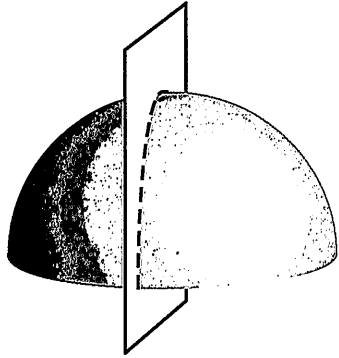


Which of the following is the cross-section of this solid?

- (A)
- (B)
- (C)
- (D)

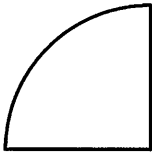
# Cross Section Worksheet Form A

- 18 A hemisphere is cut along the plane shown below.




Which of the following is the cross-section of this solid?

Ⓕ



Ⓗ



Ⓖ



Ⓙ

